

20.4.2020

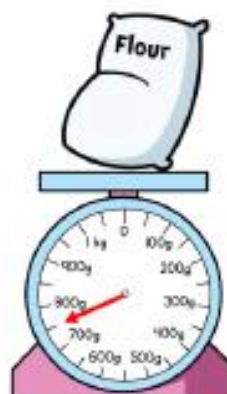


To read scales to find the mass of objects.

This week you are going to do lots of measuring mass and capacity. You can find objects around your house or even in the garden to use!

Today you need to find some weighing scales. Choose 5 different objects and estimate their mass. Then use the scales to measure their mass (using grams and kilograms). Fill in the table with your measurements.

Object	Estimate	Mass

Find the mass of each item.



Draw each scale as a straight number line.
Can you identify the missing intervals?

5

