



Complete the number sentences.  
Use the pictures to help you count:

1




$$5 + 7 = \boxed{\phantom{00}}$$

2



$$\boxed{\phantom{00}} + \boxed{\phantom{00}} = \boxed{\phantom{00}}$$

3

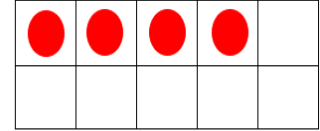
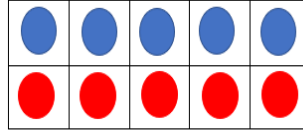


$$\boxed{\phantom{00}} + \boxed{\phantom{00}} = \boxed{\phantom{00}}$$

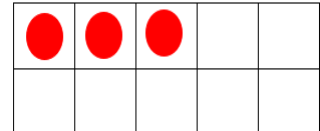
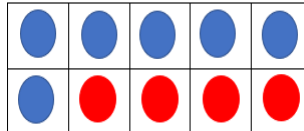
4

Match each ten frame to the correct number sentence:

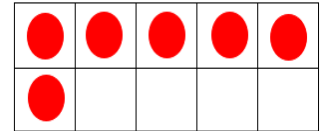
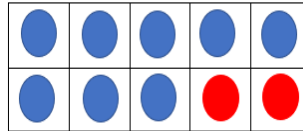
$$8 + 8 = 16$$



$$7 + 6 = 13$$




$$5 + 9 = 14$$



5

Use the number line to help you count on and complete these number sentences:

$$11 + 5 =$$



$$7 + 8 =$$

