





Complete the table.

The minute hand is pointing to ____ The hour hand is just after ____ The time is <i>quarter ____ seven</i>		The minute hand is pointing to three. The hour hand is just after six. The time is <i>quarter past six</i> .	
The minute hand is pointing to ____ The hour hand is just before ____. The time is <i>quarter ____ two</i> .		The minute hand is pointing to nine. The hour hand is just ____ twelve. The time is <i>quarter to twelve</i> .	



Quarter past is a later time than quarter to because the time has already gone past the hour.

Do you agree with Joseph?
Explain why.

How many quarters of an hour are between 7 o'clock and 9 o'clock.

Explain how you found the answer.