
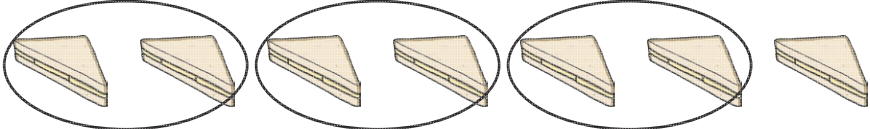

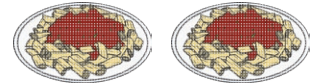
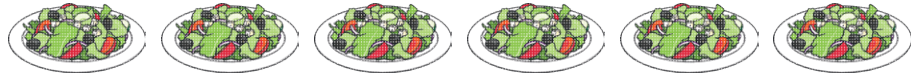
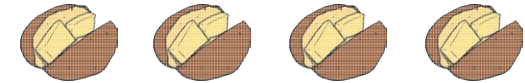
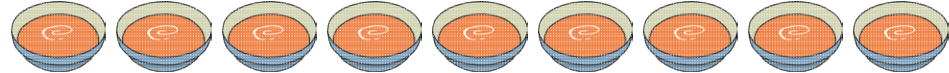
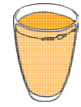



# What's for Dinner?

Pair the food items shown below by drawing circles around them. Then, write the number of items and say whether it is odd or even. The first one has been done for you.



	7	<input checked="" type="radio"/> odd <input type="radio"/> even
		<input type="radio"/> odd <input type="radio"/> even
		<input type="radio"/> odd <input type="radio"/> even
		<input type="radio"/> odd <input type="radio"/> even
		<input type="radio"/> odd <input type="radio"/> even
		<input type="radio"/> odd <input type="radio"/> even
		<input type="radio"/> odd <input type="radio"/> even
		<input type="radio"/> odd <input type="radio"/> even
		<input type="radio"/> odd <input type="radio"/> even
		<input type="radio"/> odd <input type="radio"/> even