



Lily and Matthew have found two different methods for working out how many hours are in a day.



I counted in 2s for every hour of the day.

I did  $12 + 12$



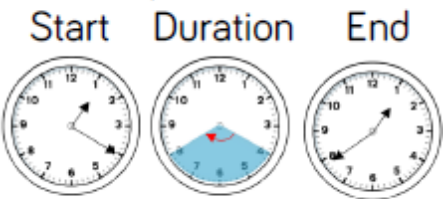
Lily

Matthew










Explain why Lily and Matthew chose the methods they did?

Whose method is most efficient?  
Why?

How much time has passed from the start to end time?



Complete the table.

Start	End	Time passed	Duration
			_____ minutes
			_____ minutes
5 past 2 	5 to 3 		_____ minutes

Iqbal leaves school at quarter past 3  
He arrives home at five to 4  
How long was Iqbal's journey?

