



Name: \_\_\_\_\_


Class: \_\_\_\_\_

Date: \_\_\_\_\_

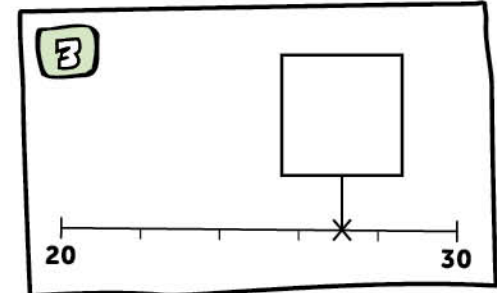


1 Place in order  
4.6 6.4 4.4

2



4.25 4.5 4.75



4  $0.6 + 0.8 =$


5 Half of 45 is

6  $48 \div 10 =$

7  $486 + 735 =$

8  $8 \times 79 =$

9

$$\begin{array}{r} 5686 \\ + 749 \\ \hline \end{array}$$


10

$$\begin{array}{r} 85 \\ \times 6 \\ \hline \end{array}$$


MY LAST SCORE?! .....

HAVE I BEAT THAT?! .....