






Reversible and Irreversible Changes

Look at the picture of the material in its original state, then draw a picture of it after heating, and show with an arrow if the change is reversible or irreversible.

	<p><-----></p> <p>or</p> <p>-----></p>	
	<p><-----></p> <p>or</p> <p>-----></p>	
	<p><-----></p> <p>or</p> <p>-----></p>	
	<p><-----></p> <p>or</p> <p>-----></p>	
	<p><-----></p> <p>or</p> <p>-----></p>	

1) What other reversible changes can you think of? Draw some in your book in the same way as above.

2) What other irreversible changes can you think of? Draw some in your book in the same way as above.