



Use the menu to find out how much different ice creams cost.
Add the price of the ice cream and the price of the topping to reach the total.




Strawberry

12p




Chocolate

15p



Vanilla

10p



Mint

11p



Sprinkles

4p



Flake

5p



Sauce

3p



Nuts

6p

Monday 13th July: How much do the ice creams cost?

Mr Meek's ice cream



Mrs Henry's ice cream



Mrs Draper's ice cream



Miss Lloyd's ice cream



Mrs Webb's ice cream



Mrs Hopkin's ice cream





$$\square + \square = \square$$



$$\square + \square = \square$$



$$\square + \square = \square$$



$$\square + \square = \square$$